

8. ANGLES AND ANGLE PROPERTIES

INTRODUCING ANGLES

We begin our study of geometry by introducing basic concepts related to angles and their properties. These concepts build the necessary foundation for further topics in geometry such as plane geometry, geometric constructions, trigonometry and transformation geometry.




In this chapter, we develop the concept of angles, how to name them, and ways in which angles can be classified.

Points, lines and rays

When discussing the properties of plane shapes, we encounter the terms points, lines and rays. These are the basic elements that make up shapes.

A point is considered as having no dimensions and only denotes position. A point is also said to have no size, length, width or height and hence no area or volume. However, when we have to mark a position in space on a plane, we represent a point by just a very fine dot (\cdot). For ease of recognition, we either draw a circle around it or place an 'x' so that the center of the 'x' is the position we wish to represent.

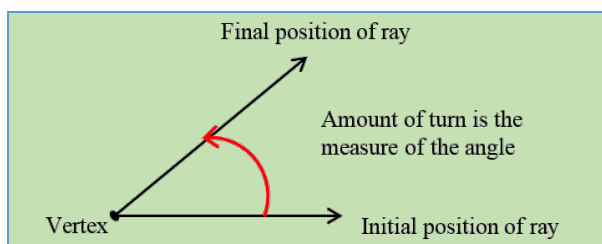
When a point moves in a constant or fixed direction, the path it traces out is a line. A line continues indefinitely in both directions. The following table illustrates the differences between lines, line segments and rays.

Geometric terms	Illustration
A line has no beginning point or end point.	 The arrows indicate that a line is infinite in length.
A line segment , though, has a beginning point and an ending point. It is a finite or a measurable portion of a line.	 The dots indicate that a line segment has a finite length. The line starts and ends with an other dot.
A ray has a beginning point, but no end point.	 The dot shows the starting point of the ray and the arrow indicates that it has infinite length.

When a point moves in such a way that its direction is not constant or fixed, a **curved line** is formed. Like straight lines, curved lines can be finite as well as infinite.

Defining Angles

An angle is a measure of the rotation or turn of a ray about its fixed point. The fixed point is called the vertex, whose plural is vertices. The diagram below shows how an angle is formed when the direction of turn is anticlockwise. The amount of turn, shown by the red arrow, is the measure of the angle.



The above definition is based on a more dynamic view of an angle that is consistent with the newer geometries often referred to as, motion geometry. In Euclidean geometry, a more static view of an angle was envisioned. In this view, angles are seen as static, formed when two rays meet at a point, called the vertex.

Classification of angles by size of turn

Angles are classified according to the size of the turn.

Measure of Angle	Name
Less than 90°	Acute angle
Exactly 90°	Right angle
Greater than 90° but less than 180°	Obtuse angle
Exactly 180°	Straight angle or half turn
Greater than 180°	Reflex angle
Exactly 360°	Whole turn or full rotation

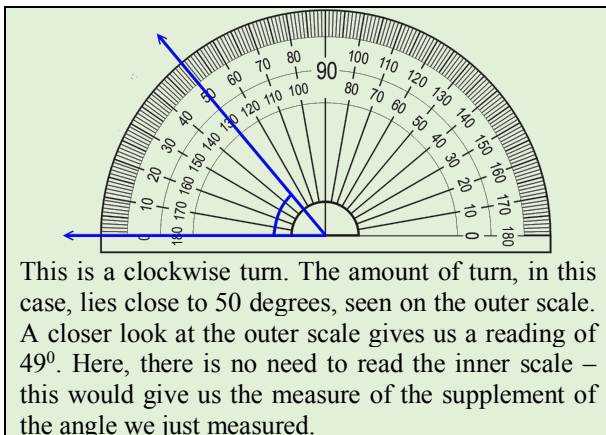
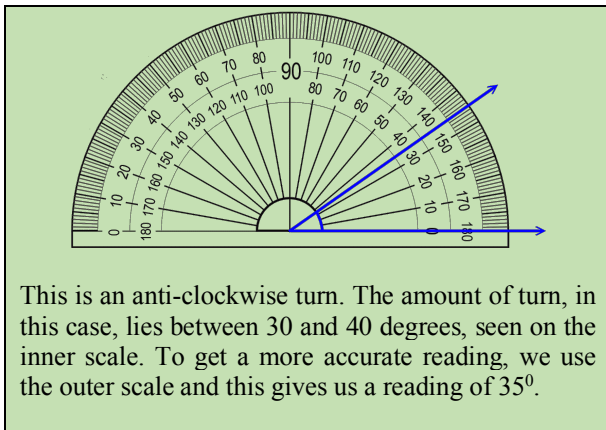
Unit for measuring angles

At this level, we will only consider one unit of measure for angles, the degree. A complete turn is equal to 360 degrees, written as 360° . Unlike units for length, capacity and mass, the units for angles are not decimalised. This was not possible because angular measure originated from measures related to the earth.

Using a protractor to measure angles

A protractor is an instrument used for measuring angles. It is usually semi-circular in shape and measures angles whose magnitudes lie from 0 to 180 degrees. On the protractor, there are two scales, an inner scale and an outer scale. When measuring an angle, either scale can be used. But, we must position the protractor so that one of the arms of the angle is exactly on the zero line and the center of the protractor is at the vertex of the angle.

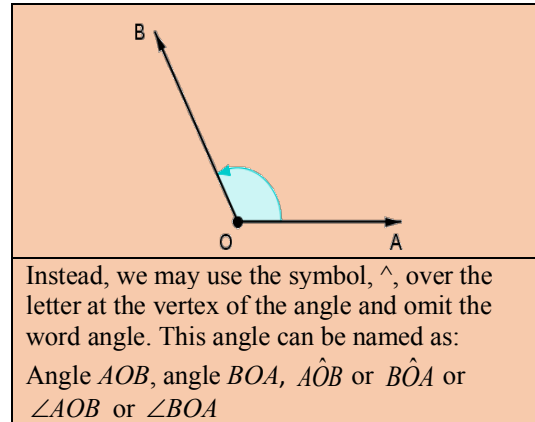
We are interested in measuring the amount of turn of the ray from its initial position to its final position. In each of the cases below, we measure the angle as the ray turns from the horizontal position to a new position.



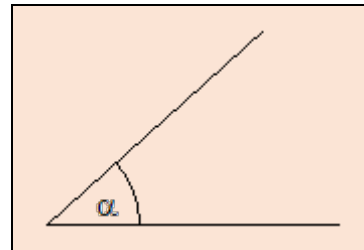
Naming angles

An angle is named by two main methods.

1. Naming the line segments that define the angle. Remember, the vertex of the angle is the common point where the two lines or arms meet. This angle is named angle AOB or angle BOA .



2. By assigning a letter to the angle, such as x or even using Greek letters, such as β , θ etc.

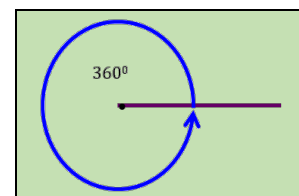


Properties of angles

In order to solve problems involving angle calculations, we need to be familiar with some angle properties.

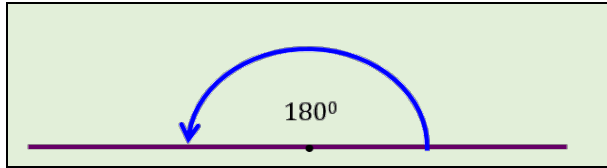
Angles around a point

When a ray makes a complete revolution about a point, the angle is equal to 360° . Therefore, the sum of angles around a point is always 360° .



Angles on a straight line

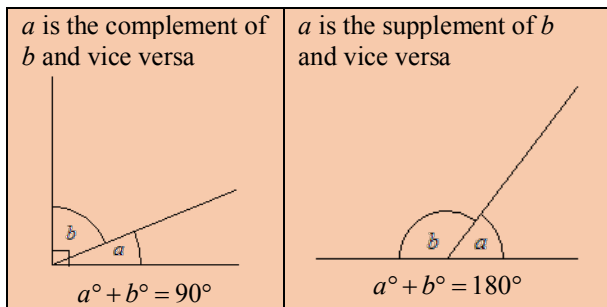
A straight line represents one half-turn or half of a revolution when measured in either direction. Therefore, the sum of the angles on a straight line is always 180° .



Complementary and Supplementary angles

If the sum of **two** angles is 90° then they are called complementary angles. Either one of the angles is said to be the complement of the other.

If the sum of **two** angles is 180° then they are called supplementary angles. Either one is called the supplement of the other.



Example 1

If x and $2x$ are complementary angles, calculate x .

Solution

Complementary angles total 90° .
 $x + 2x = 90^\circ$
 $\therefore 3x = 90^\circ$
 $x = 30^\circ$

Example 2

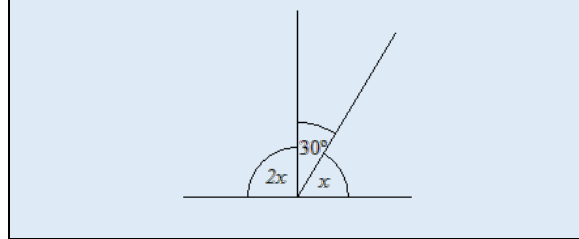
Calculate the supplement of 32° .

Solution

Supplementary angles total 180° .
 The supplement of $32^\circ = (180^\circ - 32^\circ) = 148^\circ$.

Example 3

Calculate the value of x in the diagram shown below.

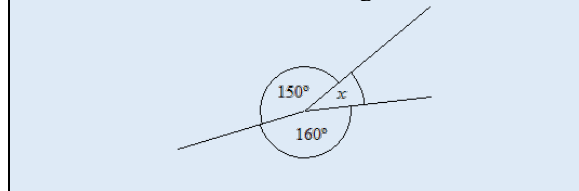


Solution

Angles in a straight line total 180°
 $2x + 30^\circ + x = 180^\circ$
 $\therefore 3x = 180^\circ - 30^\circ$
 $= 150^\circ$
 $x = 50^\circ$

Example 4

Calculate the measure of the angle x .

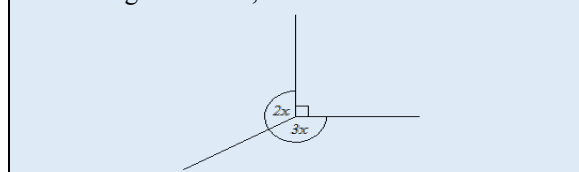


Solution

Angles around a point total 360°
 $150^\circ + 160^\circ + x = 360^\circ$
 $\therefore x = 360^\circ - (150^\circ + 160^\circ)$
 $= 50^\circ$

Example 5

In the diagram below, determine the value of x .



Solution

Angles around a point total 360°
 $2x + 3x + 90^\circ = 360^\circ$
 $\therefore 5x = 270^\circ$
 $x = 54^\circ$

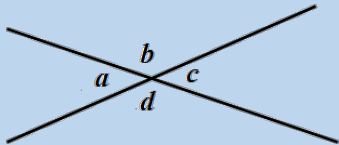
Angles formed by intersecting lines

We will examine the properties of angles formed when two lines intersect at a point.

Vertically opposite angles

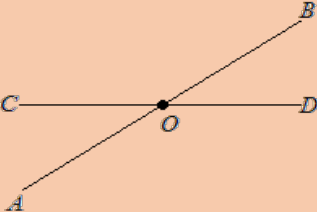
When any two straight lines intersect, two pairs of angles are formed. The angles that are opposite each other and are called vertically opposite angles.

Using the fact that the angle in a straight line is 180° , we can easily figure out the relationship between vertically opposite angles. Let a , b , c , and d represent the angles made by intersecting lines as shown below.



The sum of the angles on a straight line is 180°
 $a + b = 180^\circ$ and $c + b = 180^\circ$
 It follows that $a = c$
 Similarly,
 $c + d = 180^\circ$ and $c + b = 180^\circ$
 It follows that $d = b$

In the diagram below AB and CD are straight lines that cut at O . The two pairs of vertically opposite angles are named below.



Angle BOD is vertically opposite to angle AOC .
 $\angle BOD = \angle AOC$

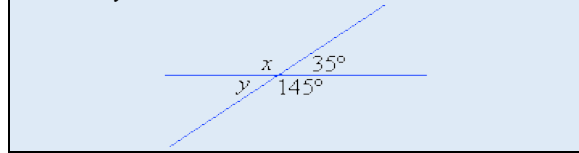
Angle BOC is vertically opposite to angle AOD .
 $\angle BOC = \angle AOD$

Vertically Opposite Angles

When two straight lines intersect, the angles that are opposite to each other are equal and called vertically opposite angles.

Example 6

In the diagram shown below, calculate the value of x and of y .

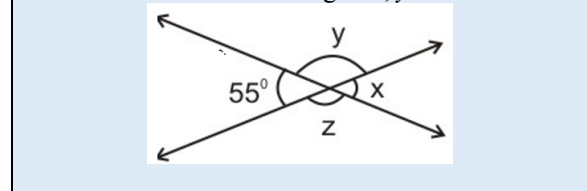


Solution

Since x is vertically opposite to the angle of magnitude 145° , then $x = 145^\circ$.
 Similarly, $y = 35^\circ$ (vertically opposite angles are equal)

Example 7

Calculate the measure of angles x , y and z .

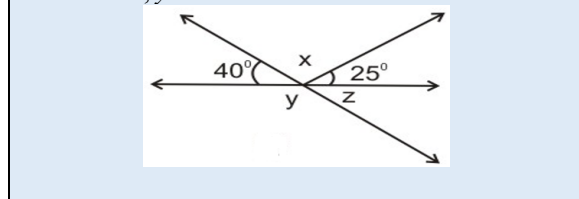


Solution

We have a pair of intersecting lines, hence,
 $x = 55^\circ$ (vertically opposite angles)
 Since the angles on a straight line add up to 180° ,
 $55^\circ + y = 180^\circ$
 $y = 180^\circ - 55^\circ = 125^\circ$
 Since y and z are vertically opposite angles, $y = z$,
 therefore, $z = 125^\circ$

Example 8

Calculate x , y and z .



Solution

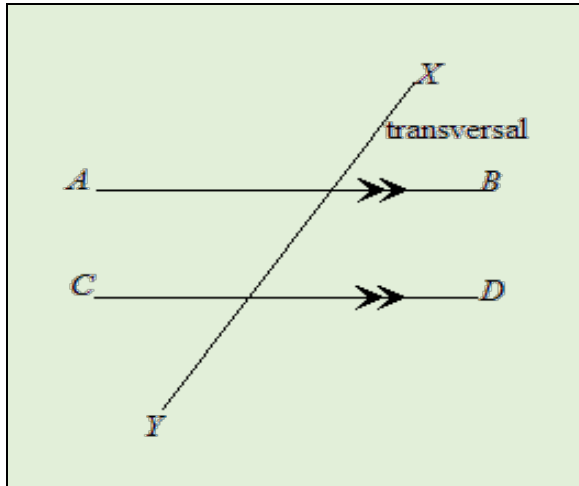
We have a pair of intersecting lines. Hence,
 $z = 40^\circ$ (vertically opposite angles)
 Angles on a straight line add up to 180°
 $y + 40^\circ = 180^\circ$
 $y = 180^\circ - 40^\circ = 140^\circ$
 Similarly,
 $x + 25^\circ + 40^\circ = 180^\circ$
 $x = 180^\circ - (25^\circ + 40^\circ) = 115^\circ$

(Notice when any deduction is made we give the reason in brackets. This is good practice.)

Angles formed by parallel lines

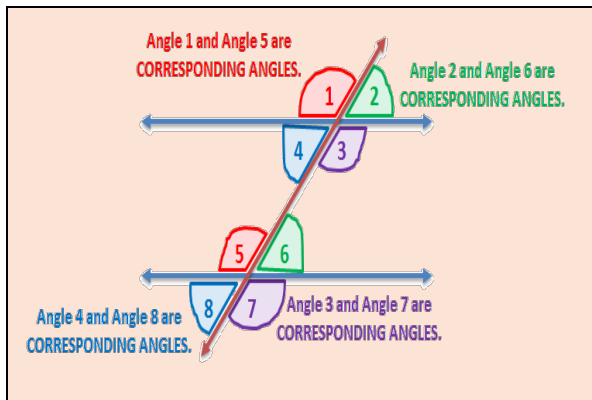
Parallel lines have the same direction and so are always the same distance apart. To indicate that two lines are parallel, we use single or double arrows as shown below. The straight lines AB and PQ are parallel lines.

Any straight line cutting across a pair or more of parallel lines is called the **transversal**.



Corresponding angles

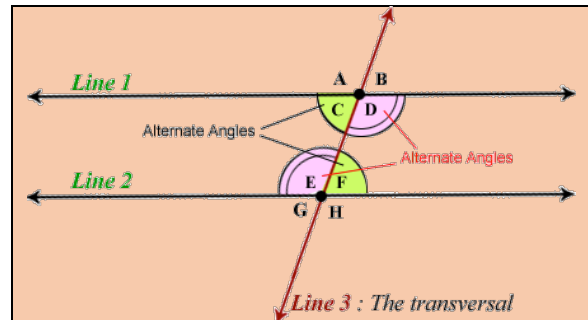
AB and CD are parallel lines. XY is a transversal, cutting the parallel lines at two identical intersections. The angles at the same positions at each of the intersections are called corresponding angles. The diagram below shows four pairs of corresponding angles.



When a transversal cuts a pair of parallel lines, the corresponding angles are equal.

Alternate angles

In the diagram below, line 1 is parallel to line 2 and line 3 is a transversal. Alternate angles are pairs of angles that lie inside the parallel lines on alternate sides of the transversal. The relationship between alternate angles is illustrated below.



We know from the sections on corresponding and vertically opposite angles that

angle F = angle B but angle B = angle C

It follows that angle F = angle C

We refer to angles F and C as alternate angles.

We also note that:

angle D = A but angle A = angle E

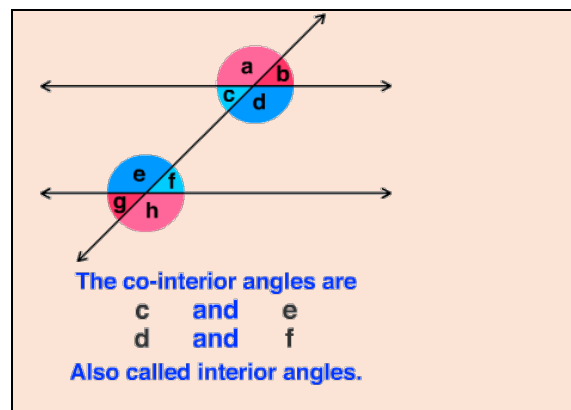
It follows that angle D = angle E

We refer to angles D and E as alternate angles.

When a transversal cuts a pair of parallel lines, alternate angles (also called Z angles) are equal.

Co-interior angles

Co-interior angles are pairs of angles that lie inside the parallel lines and on the same side of the transversal.



The co-interior angles are

c and e
d and f

Also called interior angles.

We know that the sum of the angles on a straight line is 180° .

Therefore, $d + b = 180^\circ$

But, $b = f$ (corresponding angles)

Hence, $d + f = 180^\circ$

Similarly, $c + a = 180^\circ$

But, $a = e$ (corresponding angles)

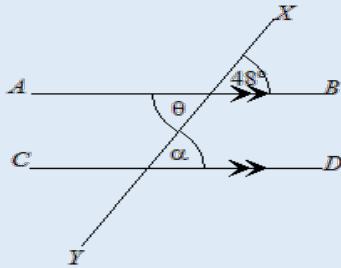
Hence, $c + e = 180^\circ$

When a transversal cuts a pair of parallel lines, co-interior angles are supplementary.

Example 9

In the diagram, find the value of

- i. θ
- ii. α



Solution

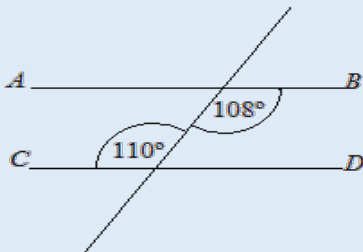
i $\theta = 48^\circ$ (Vertically opposite angles)

ii $\alpha = \theta = 48^\circ$ (Alternate angles)
Or

$\alpha = 48^\circ$ (Corresponding angles)

Example 10

State whether or not the lines AB and CD are parallel.

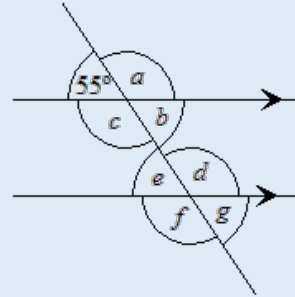


Solution

The lines AB and CD are not parallel since the two given alternate angles are **not** equal.
Hence AB is not parallel to CD .

Example 11

Calculate the size of the marked angles.



Solution

$$a = 180^\circ - 55^\circ = 125^\circ$$

(Angles on a straight line sum to 180°)

$b = 55^\circ$ (Vertically opposite to the given angle)

$c = 125^\circ$ (Vertically opposite to a)

$d = a = 125^\circ$ (Corresponding angles)

$e = 55^\circ$ (Corresponding to the given angle)

$f = d = 125^\circ$ (Vertically opposite angles)

$g = e = 55^\circ$ (Vertically opposite angles)